

Et les additions ?



○

1	5
+4	5
<hr/>	

○

3	6
+2	7
<hr/>	

○

3	9
+1	2
<hr/>	

○

3	4
+1	2
<hr/>	

○

4	6
+1	6
<hr/>	

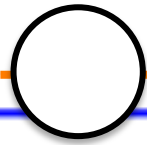
○

2	4
+6	5
<hr/>	

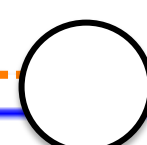
Et les additions ?



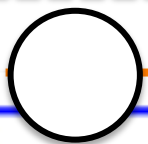
1	7
+3	7
<hr/>	



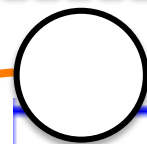
2	8
+5	9
<hr/>	



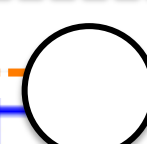
5	6
+2	3
<hr/>	



3	8
+2	4
<hr/>	



4	9
+4	9
<hr/>	



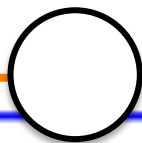
2	0
+7	3
<hr/>	



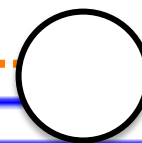
Et les additions ?



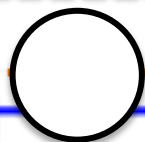
4	4
+ 1	6
<hr/>	



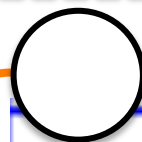
3	2
+ 6	2
<hr/>	



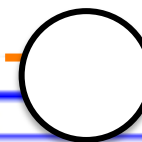
7	8
+	6
<hr/>	



2	6
+ 3	5
<hr/>	



4	7
+ 3	4
<hr/>	

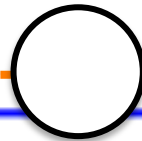


2	5
+ 6	3
<hr/>	

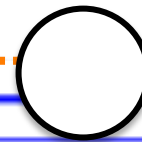
Et les additions ?



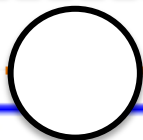
7	3
+ 1	5
<hr/>	



2	3
+ 4	9
<hr/>	

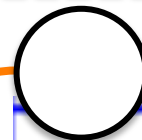


2	3
+ 5	9
<hr/>	



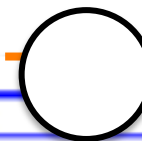
25 + 38

<hr/>	



15 + 64

<hr/>	



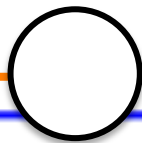
9 + 68

<hr/>	

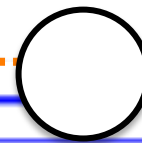
Et les additions ?



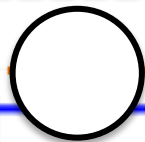
4	4
+2	8
<hr/>	



3	4
+5	3
<hr/>	

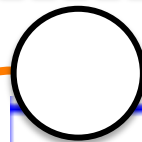


6	9
+1	9
<hr/>	



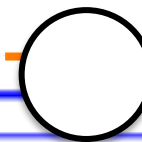
56 + 20

<hr/>	



68 + 31

<hr/>	



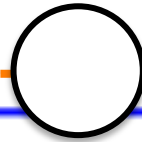
29 + 35

<hr/>	

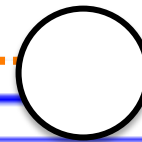
Et les additions ?




3	7
+2	5
<hr/>	



1	4
+8	2
<hr/>	

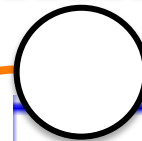


1	3
+5	7
<hr/>	



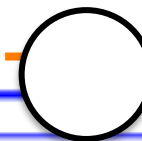
$69 + 24$

<hr/>	



$27 + 36$

<hr/>	



$89 + 4$

<hr/>	